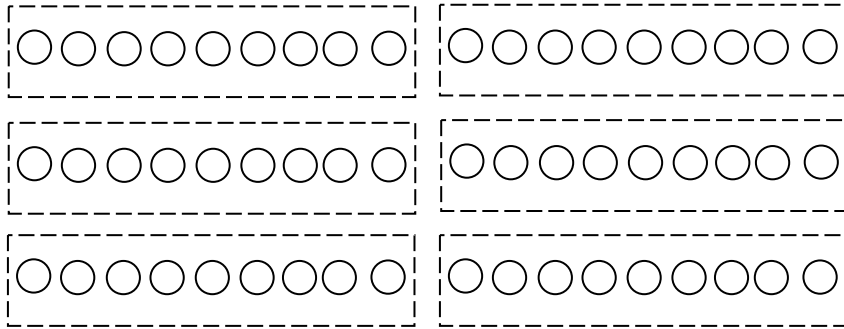


Worksheet 2 Generalization: 3rd Grade Aligned Component

For each problem, trace correct number of groups. Divide total number evenly by coloring in the dots one at a time into each group. Then circle correct answer.

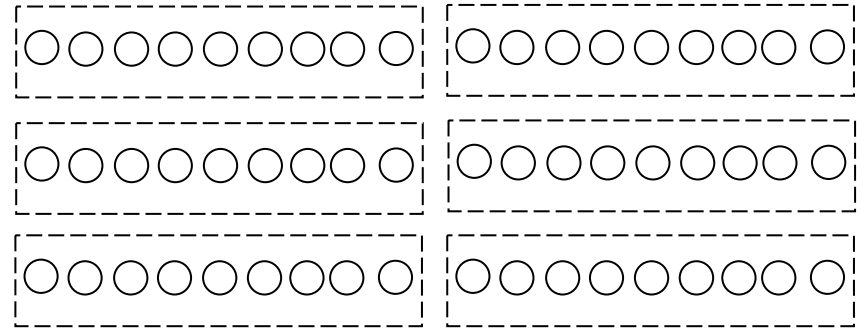
Mrs. Charles had 12 students. She divided the students into 3 groups. How many students were in each group?



Answer

5 4 7

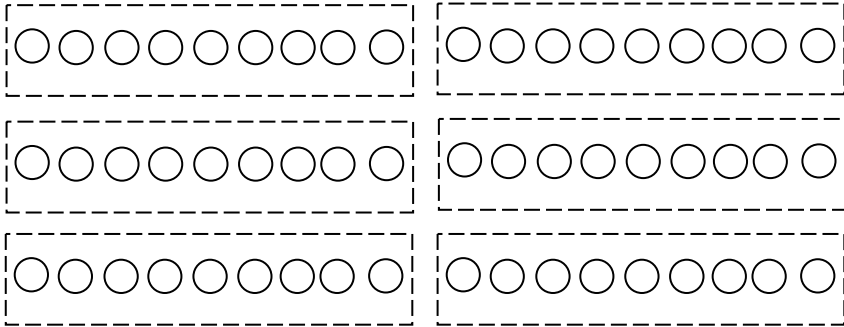
Mr. Vine has 15 students. He put the students into 5 groups. How many students are in each group?



Answer

3 10 5

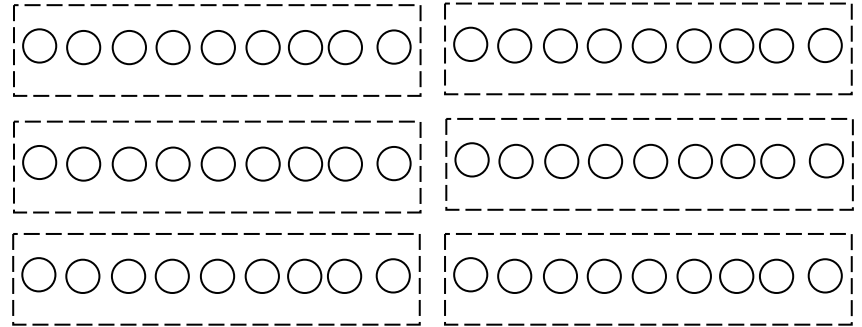
Mrs. Perry put her students into 4 groups. She has 8 students. How many students were in each group?



Answer

2 4 12

Mrs. Curtis divided the students into two groups. She has 14 students in all. How many students did she put in each group?



Answer

6 7 8