



Worksheet 1 Generalization: Essential Understandings


1. Below are two sets of counters. Both have 4 groups. Circle the set that has 3 in each group.



2. Below are 3 groups. Draw 4 circles (or glue 4 counters) in each group.



3. Below are 4 sets of 4. How many in all? (You may use manipulatives if needed to solve this problem.)



4. Circle the picture that tells how to solve this problem: Tiberius had 4 **groups of** 5 pencils. How many pencils did he have all together?

