


Level 4 Worksheet: Indicating whether an equation is true

Name: _____

___ Which equation shows what you see in this picture?



$$2 + 2 + 2 = 6$$

$$5 + 5 = 10$$

$$2 + 5 = 7$$

___ Which equation shows what you see in this picture?



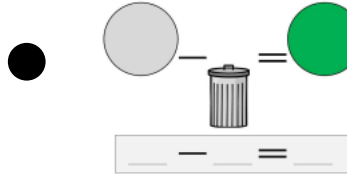
$$3 + 4 = 7$$

$$3 + 3 + 3 = 9$$

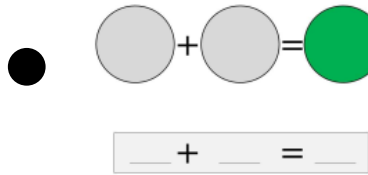
$$4 + 4 + 4 = 12$$

___ Match the equations to the chart you can use to solve it.

$7 + 2$ ●



$4 - 1$ ●



___ Solve the each side of the equation and write your answer below.

$$3 + 2 = 6 - 1$$
$$\underline{\quad} = \underline{\quad}$$

___ Are both sides equal?

Yes No

___ Is the equation true?

Yes No