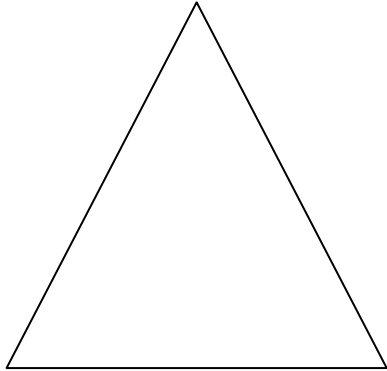



## Worksheet 1: Build Essential Understanding


**Use a marker to draw a line on the perimeter of this shape.** If student is unable to use a marker, they can put stickers on the perimeter or use their finger to trace it.




**Use a marker to color the area of the shape.** If student is unable to use a marker, they can put stickers in the area or use their finger to show it.



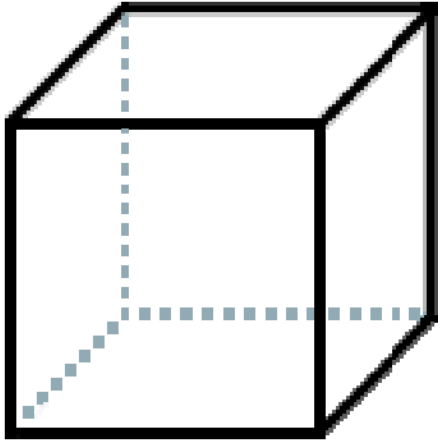
**The length is the longest side of a rectangle. Use your marker to draw a line along the length.**



**The width is the shortest side of a rectangle. Use your marker to draw a line along the width.** If student is unable to use a marker, they can put stickers along or use their finger to trace it.



**The height is the side that goes up and down on a three dimensional cube/box. Use your marker to draw a line along the height.** If student is unable to use a marker, they can put stickers along height or use their finger to trace.



**The volume is the space inside a three dimensional cube/box. Use a marker to color the volume of the shape.** If student is unable to use a marker, they can put stickers in the volume or use their finger to show.

