


Ratio and Proportion SKILL TEST 1: Essential Understandings

Record “+” for an independent correct response or “-“ for incorrect response beside number in blank.



1. Below are two sets of counters. Both have 3 groups. Circle the set that has 2 in each group.



2. Below are 3 groups. Draw 6 circles (or glue 6 counters) in each group.



3. Below are 3 sets of 6. How many in all? (You may use manipulatives if needed to solve this problem.)



4. Circle the picture that tells how to solve this problem: Mrs. Shawl had 4 groups of students and 12 students all together. How many students were **in each** group?

