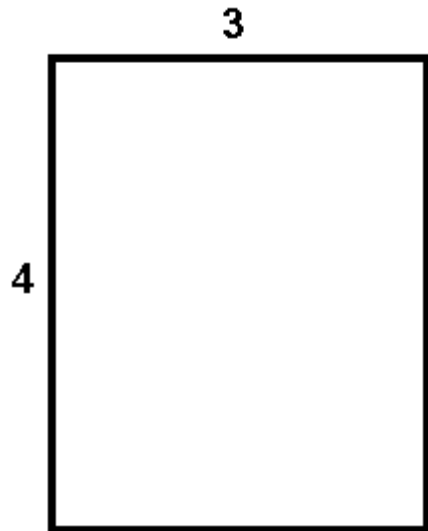


MEASUREMENT/GEOMETRY SKILLS TEST 2: Calculating Area

___ What is the area of this shape?



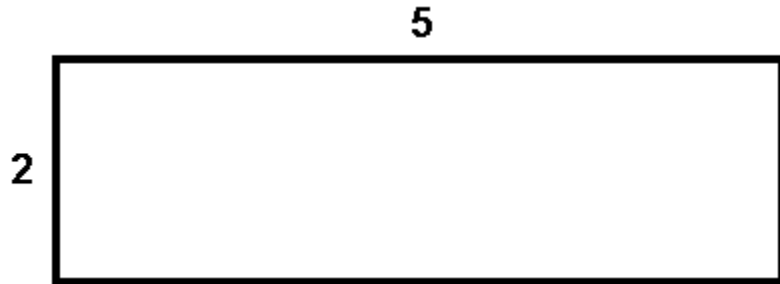
$$\text{Area} = \text{length} \times \text{width}$$

$$\text{Area} = \underline{\hspace{2cm}} \times \underline{\hspace{2cm}}$$

length width

$$\text{Area} = \underline{\hspace{4cm}}$$

___ What is the area of this shape?



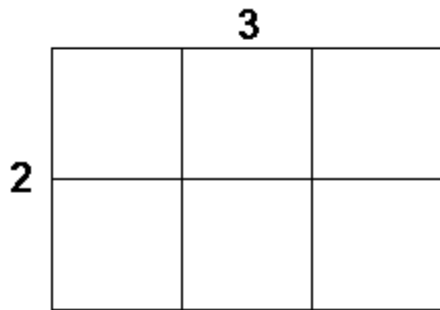
Area = length x width

Area = _____

___ **What is the area of this rectangle?** (Students can either count the tiles or use a calculator)

area = length x width

area = _____



___ **What is the area of this book cover?**

area = length x width

area = _____

