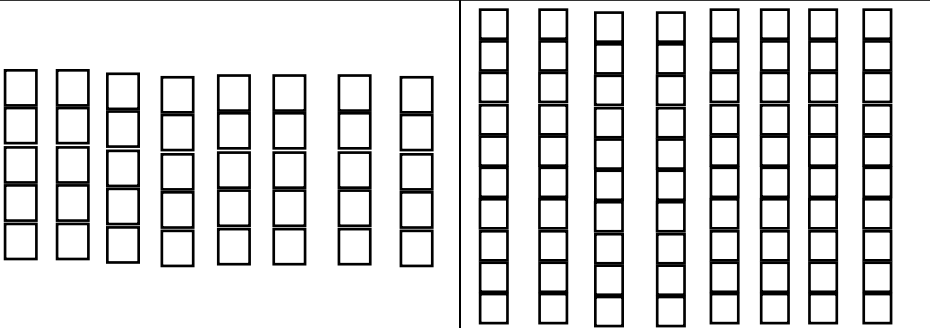
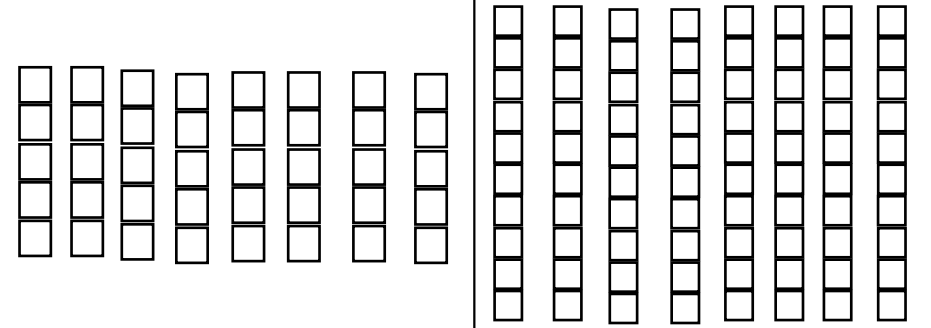


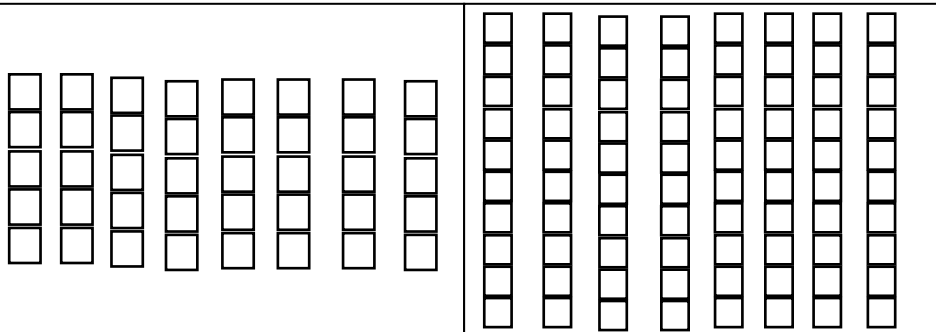
Ratio and Proportion SKILL TEST 3: 4th grade aligned

For each problem choose the correct size groups and color the number of groups. Then circle the answer.

<p>7 groups of 10 students got on the bus. How many in all are on the bus?</p> <div style="display: flex; justify-content: space-around; align-items: center;">  </div> <div style="display: flex; justify-content: space-around; margin-top: 10px;"> <div style="border: 1px solid gray; background-color: #cccccc; padding: 5px; width: 150px; text-align: center;">5 10 15 20 25 30 35 40 45 50</div> <div style="border: 1px solid gray; background-color: #cccccc; padding: 5px; width: 150px; text-align: center;">10 20 30 40 50 60 70 80 90 100</div> </div> <p>Answer</p> <div style="display: flex; justify-content: center; gap: 50px; margin-top: 20px;"> 65 70 75 </div>	<p>2 groups of 5 students rode the bus. How many in all rode the bus?</p> <div style="display: flex; justify-content: space-around; align-items: center;">  </div> <div style="display: flex; justify-content: space-around; margin-top: 10px;"> <div style="border: 1px solid gray; background-color: #cccccc; padding: 5px; width: 150px; text-align: center;">5 10 15 20 25 30 35 40 45 50</div> <div style="border: 1px solid gray; background-color: #cccccc; padding: 5px; width: 150px; text-align: center;">10 20 30 40 50 60 70 80 90 100</div> </div> <p>Answer</p> <div style="display: flex; justify-content: center; gap: 50px; margin-top: 20px;"> 10 15 20 </div>
----------------------------------------------------------------------------------------------------------------------------------------------------------------------------------------------------------------------------------------------------------------------------------------------------------------------------------------------------------------------------------------------------------------------------------------------------------------------------------------------------------------------------------------------------------------------------------------------------------------------------------------------------------------------------------------------------------------------------------------------------------------------------------------------------------------	------------------------------------------------------------------------------------------------------------------------------------------------------------------------------------------------------------------------------------------------------------------------------------------------------------------------------------------------------------------------------------------------------------------------------------------------------------------------------------------------------------------------------------------------------------------------------------------------------------------------------------------------------------------------------------------------------------------------------------------------------------------------------------------------------------

Student Name: _____

7 groups of 5 went to the zoo. How many went all together?



5 10 15 20 25 30 35 40 45 50

10 20 30 40 50 60 70 80 90 100

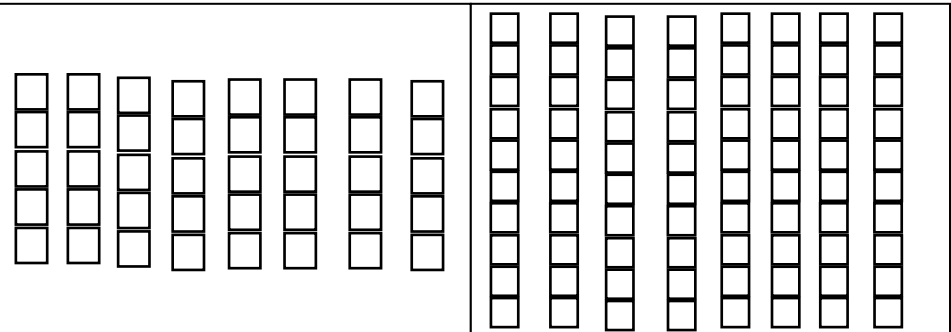
Answer

25

30

35

5 groups of 5 walked to the supermarket. How many walked in all?



5 10 15 20 25 30 35 40 45 50

10 20 30 40 50 60 70 80 90 100

Answer

20

25

30